

Tuesday 19th May 2020

Good morning Class 5!

Did you know this week is Mental Health Awareness week? We need to look after our mental health, it is incredibly important! The theme this year is kindness.

Kindness makes you and everyone around you feel good; when people experience kindness, they are more likely to be kind to others in return. It is just as contagious as coronavirus (but we want you to spread kindness!).

*Kindness is a language
that the deaf can hear
and the blind can see.*

Mark Twain

Before you begin your tasks today, I would like you to write down 3 kind things that you are going to do today. You could help a parent with the dishes, give a member of your family a compliment or even do something as simple as giving a loved one you live with a big hug!

Yesterday's Answers:

Maths

All

- | | |
|--|---|
| 1a. A. -8; B. -6; C. -1; D. 4 | 1b. A. -7; B. -3; C. 1; D. 4 |
| 2a. 14°C | 2b. 8°C |
| 3a. A. -5; B. -7 | 3b. A. -9; B. -6 |
| 4a. False, because it's pointing to -3. | 4b. False, because it's pointing to 4. |

Most

- | | |
|---|---|
| 5a. From L-R: -15, -7, -4, -1, 12 | 5b. From L-R: -18, -4, 2, 8, 15 |
| 6a. 31°C | 6b. 50°C |
| 7a. A. -28; B. -23 | 7b. A. -17; B. -9 |
| 8a. False, because it's pointing to -24. | 8a. False, because it's pointing to -10. |

Some

- | | |
|--|--|
| 9a. From L-R: -29, -22, -18, -12, -1 | 9b. From L-R: -38, -24, -15, -11, -4 |
| 10a. 51°C | 10b. 29°C |
| 11a. A. -35; B. -23 | 11b. A. -15; B. -7 |
| 12a. False, because it's pointing to -35. | 12b. False, because it's pointing to -25. |

Today's Tasks:

English – Spelling

Choose a spelling list and practise.

library
material
medicine
mention
minute

necessary
neighbour
nuisance
occupy
occur

English - Writing

Uh-oh! Look at all these mistakes! Correct the punctuation and copy them out correctly.

1. where have you been all day
2. ill need two things a tent and a sleeping bag
3. i dont believe it
4. youre my friend my very best friend
5. how awful
6. please could you fetch me three apples two pears a peach and a carton of orange juice
7. if you dont stop that immediately im going to
8. dont do that actually never mind
9. move along theres nothing to see the police officer said
10. thomas has five hundred pounds £500
11. come back thats benjamins bike she yelled
12. shenika cant stand fruit cake benny will eat it

Challenge:

Write a paragraph and try to use each of these punctuation marks () ! . ? , ; : ' " ...

Your paragraph cannot be more than 200 words!

Maths

Today we will be recapping our work on factors. I have included a multiplication grid for those of you that need it. (Remember you should know all multiplication facts by the end of Year 4, so if you don't, make sure you get in that extra practise).

'Factors' are explained below:

A number can have many factors!

Example:

2 and 4 are factors of 8,
because $4 \times 2 = 8$

Also 1 and 8 can also be factors of 8,
because $1 \times 8 = 8$

Therefore 1, 2, 4, 8 are all factors of 8.

x	1	2	3	4	5	6	7	8	9	10	11	12
1	1	2	3	4	5	6	7	8	9	10	11	12
2	2	4	6	8	10	12	14	16	18	20	22	24
3	3	6	9	12	15	18	21	24	27	30	33	36
4	4	8	12	16	20	24	28	32	36	40	44	48
5	5	10	15	20	25	30	35	40	45	50	55	60
6	6	12	18	24	30	36	42	48	54	60	66	72
7	7	14	21	28	35	42	49	56	63	70	77	84
8	8	16	24	32	40	48	56	64	72	80	88	96
9	9	18	27	36	45	54	63	72	81	90	99	108
10	10	20	30	40	50	60	70	80	90	100	110	120
11	11	22	33	44	55	66	77	88	99	110	121	132
12	12	24	36	48	60	72	84	96	108	120	132	144

Choose a difficulty and complete:

Fill in the missing factors.	Write a list of all the factors of each number.	Write a list of all the factors of each number.
Factors of 15: 1, 3, __, 15	14	48
Factors of 20: 1, __, 4, 5, __, 20	18	121
Factors of 12: __, 2, 3, __, 6, 12	24	72
Factors of 36: 1, 2, __, 4, 6, 9, 18, __	36	84











Geography


Match the flags to the countries (next page). How many do you already know? You may need to do some research for the others.











Hint: Some of these flags have featured at the start of home learning tasks for those who have been paying attention 😊.

Matching Flags to Countries

Match the flags to their countries.

									
---	---	---	---	--	---	---	---	---	---



									
---	---	---	---	--	---	---	---	---	---